

GWALIOR GLORY SCHOOL

Class : V

WINTER HOLIDAY HOMEWORK ENGLISH (2024-25)

Name : _____ Sec. : _____ Roll No. : _____ Date : _____

(1) Writing Skills:

My Favourite Superhero!

A superhero is a character in a story or movie who has special powers and uses them to help people.

Draw your favourite superhero in the space provided and write about its special powers and strengths. Also write in brief about the ways they help others.

(3) **PREPOSITION OF PLACE:**

Look at the pictures and complete the sentences with the correct prepositions.



There's a small window _____ the living room. _____ the window, _____ the wall, there's a yellow sofa _____ a large rug. The sofa is _____ a lamp and a plant. _____ the sofa there's a coffee table. There's a shelf _____ the plant and there are two pictures _____ the wall. There are two cushions _____ the sofa and a little dog is _____ them. _____ the sofa there's a TV. There's a cat _____ a blue basket _____ the sofa.

There's a small window _____ the study. There's an office cabinet with a drawer _____ the window. There's a printer _____ the cabinet. There's a revolving chair _____ the desk. There are some files _____ the wall _____ the shelf. There's a lamp _____ the files and the monitor. There's a cat sleeping _____ the desk. There's a cup of coffee _____ the keyboard. There is a picture on the wall _____ the monitor.






There's a cat _____ the girls' bed. There's a shelf and a clock _____ the bed. There's a desk _____ wall in the corner of the room. There's a pinboard _____ the desk and a chair _____ it. There's a little file cabinet _____ the window. There's a football _____ it and a fish bowl _____ it. There's a floor lamp _____ the window. _____ the lamp and the chest of drawers there's a plant. There's a rug _____ the cabinet. There's an open book _____ the paper bin _____ the rug.






(4) Create your own comic!

Draw the characters, write their dialogues and give an interesting end to the comic.

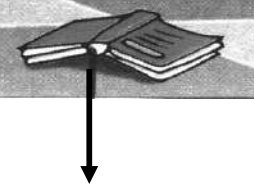
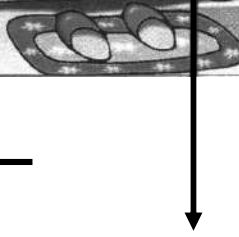



FINISH THIS COMIC!



(5) नीचे दिए गए चित्रों के लिए दो-दो समान अर्थ वाले शब्द लिखो।



(6) नीचे दिए गए चित्र में दी गई वस्तुओं के नाम संस्कृत भाषा में लिखिए।



(7) दिए गए शब्दों से वाक्य रचना कीजिए।

(क) अत्र



(ख) तत्र



(8) निम्नलिखित वाक्यों की संस्कृत बनाइए।

1) बालक चलता है।

_____।

2) यह बालिका खेलती है।

_____।

3) मैं सुधीर हूँ।

_____।

4) आप कौन हैं?

_____?

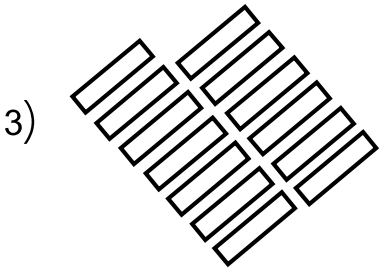
5) नमस्कार! मैं शिक्षक हूँ।

_____।

(9) निम्नलिखित वस्तुओं की गणना (गिनती) करके संस्कृत भाषा में संख्या लिखिए।









GWALIOR GLORY SCHOOL

Class : V

WINTER HOLIDAY HOMEWORK MATHEMATICS (2024-25)

Name : _____ Sec. : _____ Roll No. : _____ Date : _____

- 1) Draw a picture of football ground. Find the length and width of any football ground of your choice. Find its area and perimeter.

Name of football ground : _____

Length of football ground : _____

Width of football ground : _____

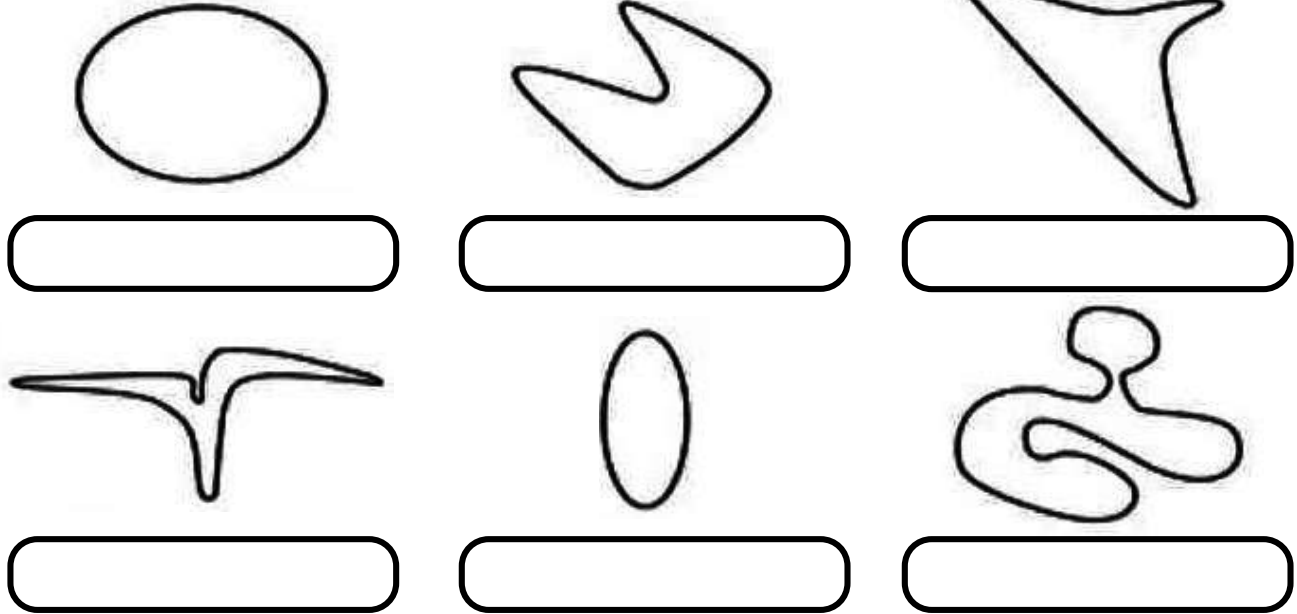
Area of football ground : _____

Perimeter of football ground : _____

- 2) Your suitcase weighs 15.65 kilogram. You learn that your airline only allows a maximum of 15 kilogram of luggage. Which of the following items will you remove, so that the least weight is removed for the suitcase to be allowed.

A Sweater 450 grams	A book 720 grams	A camping stove 1500 grams	Chocolates 500 grams

3) Find the perimeter of the following figures using a thread and write the answer in the space provided.



4) Collect the data of vehicles in your locality and answer the following questions.

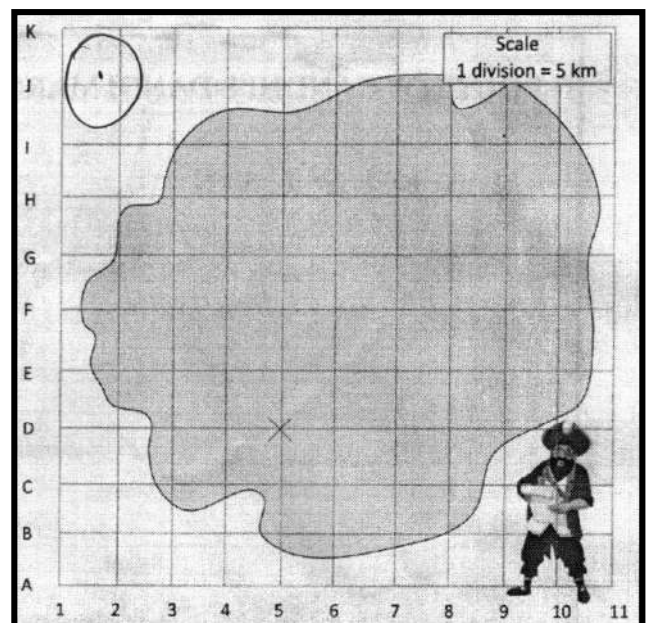
Vehicles	Number
Cars	
Two-wheelers	
Bicycle	

- What part of the vehicles are bicycles? _____
- What is the one fourth number of total vehicles? _____
- What is the one third number of cars? _____

5) **Treasure Hunt! A pirate buried a treasure in a secret spot on an island. A map of the Island is given. To find the treasure, follow these clues:**

- Start at the symbol X.
- Travel north for 10 km.
- Travel east for 5 km.
- Travel north for 15 km.
- Travel east for 15 km.
- Travel south for 10 km.
- Travel west for 5 km.

Where is the treasure buried? Circle the spot.



GWALIOR GLORY SCHOOL

WINTER HOLIDAY HOMEWORK EVS (2024-25)

Class : V

Name : _____ Sec. : _____ Roll No. : _____ Date : _____

1) **NOTE:**

- ★ Do any one project.
- ★ Submit it by 18th January 2025.
- ★ This project will be marked for Term-II

PROJECT-I Make a poster to place on the notice board of your school regarding how to prevent the spread of diseases caused by mosquitoes.

OR

PROJECT-II Make a travelogue of your state, Madhya Pradesh on A-4 sheet. Mention the place to visit, important temples or tourist spots, and the best time to visit. Also, write the important crops and minerals found in the state.

GWALIOR GLORY SCHOOL

WINTER HOLIDAY HOMEWORK EVS (2024-25)

Class : V

Name : _____ Sec. : _____ Roll No. : _____ Date : _____

1) **NOTE:**

- ★ Do any one project.
- ★ Submit it by 18th January 2025.
- ★ This project will be marked for Term-II

PROJECT-I Make a poster to place on the notice board of your school regarding how to prevent the spread of diseases caused by mosquitoes.

OR

PROJECT-II Make a travelogue of your state, Madhya Pradesh on A-4 sheet. Mention the place to visit, important temples or tourist spots, and the best time to visit. Also, write the important crops and minerals found in the state.

IN QUESTION 2 DO ANY 2 PARTS.

2) a) Draw a dam and write advantages and disadvantages

Advantages:-

- (1) _____
- (2) _____
- (3) _____

Disadvantages:-

- (1) _____
- (2) _____
- (3) _____

2) b) We all know that a player is recognized by the effort they put in the game they play. Draw a beautiful picture of the sports you like to play. Describe that sports in about 8-10 lines.

2) c) Imagine that you are a farmer. On an A-4 sheet write down 5-7 points mentioning all kinds of changes that have taken place in agricultural practices over the years. (Eg. Like natural fertilizers, have been replaced by chemical fertilizers, degradation in soil quality etc.)

IN QUESTION 2 DO ANY 2 PARTS.

2) a) Draw a dam and write advantages and disadvantages

Advantages:-

- (1) _____
- (2) _____
- (3) _____

Disadvantages:-

- (1) _____
- (2) _____
- (3) _____

2) b) We all know that a player is recognized by the effort they put in the game they play. Draw a beautiful picture of the sports you like to play. Describe that sports in about 8-10 lines.

2) c) Imagine that you are a farmer. On an A-4 sheet write down 5-7 points mentioning all kinds of changes that have taken place in agricultural practices over the years. (Eg. Like natural fertilizers, have been replaced by chemical fertilizers, degradation in soil quality etc.)

GWALIOR GLORY SCHOOL

Class : V

WINTER HOLIDAY HOMEWORK

GK (2024-25)

Name : _____ Sec. : _____ Roll No. : _____ Date : _____

1) KNOW YOUR STATE:-

Paste the map of your state. Mark its capital and write the name.

WRITE THE NAMES OF

- ◆ Rivers in your state : _____
- ◆ National Park in your state : _____
- ◆ Fort in your state : _____
- ◆ Tourist Place in your state : _____

2) There are several man-made structures which are symmetrical. Write the names of any three symmetrical man-made structures and paste their pictures also.

3) Write the name of any four freedom fighter and the slogans given by them.

a) _____

b) _____

c) _____

d) _____

4) 'If conservation of natural resources goes wrong, nothing else will go right'
M.S. Swaminathan

5) **CONSERVATION OF RESOURCES**




Drag the terms next to the correct definitions.

conservation natural resources recycle reuse reduce

- 1. To make new products from old products
- 2. Things found in nature used by living things
- 3. To use less of something
- 4. The wise or careful use of natural resources
- 5. To use something again instead of throwing it away

Select 'Yes' or 'No' to tell whether each item conserves resources.

- 6. Stand in the refrigerator while drinking water.
- 7. Turn off lights when not in use.
- 8. Take baths instead of quick showers.
- 9. Use cold water in the summers instead of hot water.
- 10. Leave the water running while brushing your teeth.
- 11. Leave the light on until you return to the room.
- 12. Use a dryer instead of the clothesline.



GWALIOR GLORY SCHOOL

Class : V

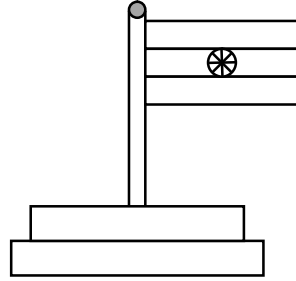
WINTER HOLIDAY HOMEWORK COMPUTER (2024-25)

Name : _____ Sec. : _____ Roll No. : _____ Date : _____


(1) Write down the MS LOGO primitives for below given word and images.

GWALIOR
GLORY
SCHOOL

a)



b)



GWALIOR GLORY SCHOOL

Class : V

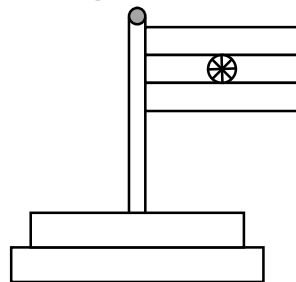
WINTER HOLIDAY HOMEWORK COMPUTER (2024-25)

Name : _____ Sec. : _____ Roll No. : _____ Date : _____

(1) Write down the MS LOGO primitives for below given word and images.

GWALIOR
GLORY
SCHOOL

a)



b)

